



## Reversible and irreversible changes

Name: .....


Look at each of the changes pictured below. Fill in the blanks to say whether the changes are reversible or irreversible. For the reversible changes, draw in a second arrow below the first and pointing in the opposite direction.




Baking a cake is ..... change.



Melting chocolate is ..... change.



A nail rusting is ..... change.



Toasting bread is ..... change.