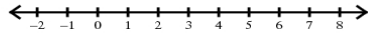


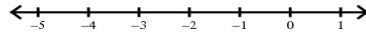
Solving Inequalities

Solve each inequality and graph its solution.

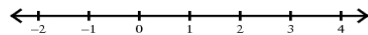
1) $0 > 3x - 3 - 6$



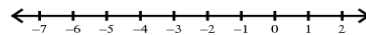
2) $4x + 1 - 1 \geq -8$



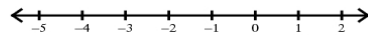
3) $-1 \leq 2n + 4 - 5$



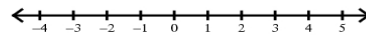
4) $-6 > 5n + 5 + 4$



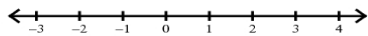
5) $0 \leq 2n + 3n$




6) $2p - 4p \leq -2$



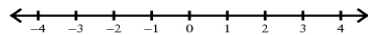
7) $7 < -(-k - 3) + 2$



8) $3 - 2(n - 4) > -1$



9) $-5(1 - 4a) > -5$



10) $-2(b + 1) + 4 < 10$

