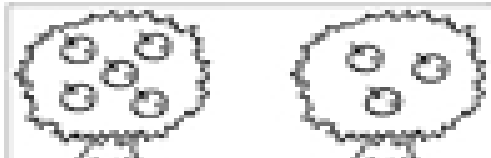







More than or less than?





Fill in the apples and numbers that make each sentence true.

 
 is more than


 
 is more than

 
 is more than

 
 is more than

Fill in the flowers and numbers that make each sentence true.

 
 is less than

 
 is less than

 
 is less than

 
 is less than