

Name _____

Johnny Appleseed
Facts Through 10


Apple Facts


Complete each problem.

If the problem is on an , write a +.

If the problem is on a , write a -.

Solve each problem.


a. 
$$\begin{array}{r} 12 \\ - 5 \\ \hline \end{array}$$


b. 
$$\begin{array}{r} 5 \\ - 1 \\ \hline \end{array}$$


c. 
$$\begin{array}{r} 7 \\ - 2 \\ \hline \end{array}$$

d. 
$$\begin{array}{r} 6 \\ - 5 \\ \hline \end{array}$$


e. 
$$\begin{array}{r} 9 \\ - 9 \\ \hline \end{array}$$


f. 
$$\begin{array}{r} 8 \\ - 6 \\ \hline \end{array}$$


g. 
$$\begin{array}{r} 8 \\ - 7 \\ \hline \end{array}$$

h. 
$$\begin{array}{r} 7 \\ - 7 \\ \hline \end{array}$$

i. 
$$\begin{array}{r} 10 \\ - 7 \\ \hline \end{array}$$


j. 
$$\begin{array}{r} 8 \\ - 4 \\ \hline \end{array}$$


k. 
$$\begin{array}{r} 15 \\ - 7 \\ \hline \end{array}$$


l. 
$$\begin{array}{r} 7 \\ - 2 \\ \hline \end{array}$$


m. 
$$\begin{array}{r} 10 \\ - 4 \\ \hline \end{array}$$


n. 
$$\begin{array}{r} 7 \\ - 6 \\ \hline \end{array}$$

o. 
$$\begin{array}{r} 4 \\ - 3 \\ \hline \end{array}$$

p. 
$$\begin{array}{r} 9 \\ - 5 \\ \hline \end{array}$$

q. 
$$\begin{array}{r} 8 \\ - 5 \\ \hline \end{array}$$

r. 
$$\begin{array}{r} 8 \\ - 8 \\ \hline \end{array}$$

s. 
$$\begin{array}{r} 28 \\ - 9 \\ \hline \end{array}$$

Answer Key: Reverse problems c, d, n, o, r, s, with on the back of this sheet. Subtract to find the difference in each problem.