




Name: _____


Subtracting up to 10

Subtract and write the correct number in the box.

	$\begin{array}{r} 8 \\ - 5 \\ \hline \dots \end{array}$
---	---

	$\begin{array}{r} 8 \\ - 6 \\ \hline \dots \end{array}$
--	---

	$\begin{array}{r} 9 \\ - 2 \\ \hline \dots \end{array}$
---	---

	$\begin{array}{r} 9 \\ - 3 \\ \hline \dots \end{array}$
---	---

	$\begin{array}{r} 10 \\ - 1 \\ \hline \dots \end{array}$
--	--