

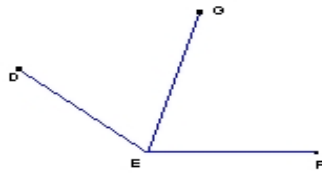
Name : _____

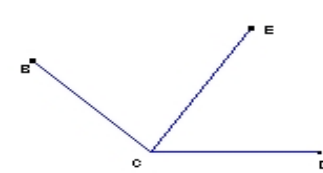
Score : _____


Teacher : _____

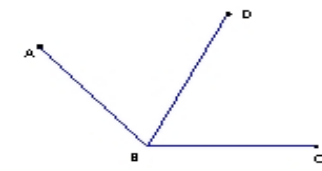
Date : _____

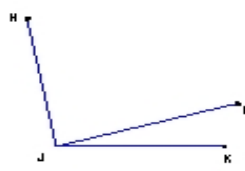
Find the missing angle measurement using the angle addition postulate.

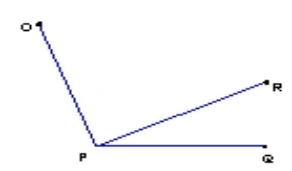
1) 
 $\angle DEG = 66^\circ$
 $\angle GEF = \underline{\hspace{2cm}}$
 $\angle DEF = 140^\circ$

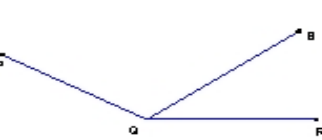
2) 
 $\angle BCE = 77^\circ$
 $\angle ECD = 58^\circ$
 $\angle BCD = \underline{\hspace{2cm}}$

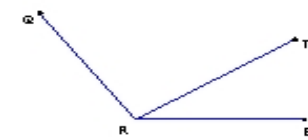
3) 
 $\angle GHK = 71^\circ$
 $\angle KHJ = 19^\circ$
 $\angle GHJ = \underline{\hspace{2cm}}$

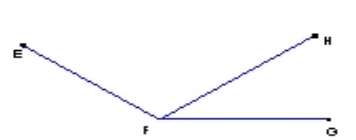
4) 
 $\angle ABD = \underline{\hspace{2cm}}$
 $\angle DBC = 65^\circ$
 $\angle ABC = 130^\circ$

5) 
 $\angle HJL = \underline{\hspace{2cm}}$
 $\angle LJK = 17^\circ$
 $\angle HJK = 100^\circ$

6) 
 $\angle OPR = 84^\circ$
 $\angle RPQ = 26^\circ$
 $\angle OPQ = \underline{\hspace{2cm}}$

7) 
 $\angle PQS = 113^\circ$
 $\angle SQR = \underline{\hspace{2cm}}$
 $\angle PQR = 150^\circ$

8) 
 $\angle QRT = 92^\circ$
 $\angle TRS = \underline{\hspace{2cm}}$
 $\angle QRS = 125^\circ$

9) 
 $\angle EFH = 110^\circ$
 $\angle HFG = 35^\circ$
 $\angle EFG = \underline{\hspace{2cm}}$