



## Volumes of cubes

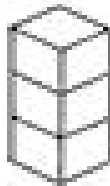
This cube is 1 cm long,  
1 cm high, and 1 cm wide.  
We say it has a volume of  
1 cubic centimeter (1 cm<sup>3</sup>).



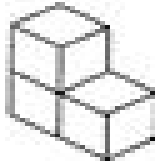
If we put 4 of these  
cubes together the  
new shape has a  
volume of 4 cm<sup>3</sup>.



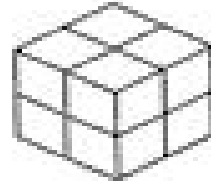
These shapes are made of 1 cm<sup>3</sup> cubes. What are their volumes?




\_\_\_\_\_ cm<sup>3</sup>



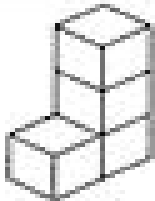
\_\_\_\_\_ cm<sup>3</sup>



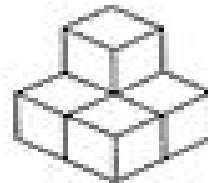
\_\_\_\_\_ cm<sup>3</sup>




\_\_\_\_\_ cm<sup>3</sup>



\_\_\_\_\_ cm<sup>3</sup>



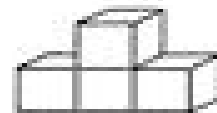
\_\_\_\_\_ cm<sup>3</sup>



\_\_\_\_\_ cm<sup>3</sup>



\_\_\_\_\_ cm<sup>3</sup>



\_\_\_\_\_ cm<sup>3</sup>