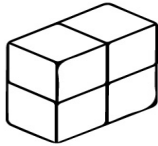


Name: _____ Date: _____

Cube Volume

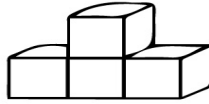
Count the cubes and write the volume of each shape.

1.)



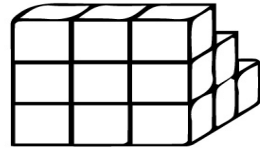
_____ cubic units.

2.)



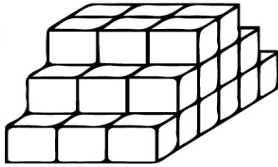
_____ cubic units.

3.)



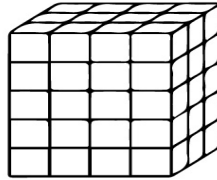
_____ cubic units.

4.)



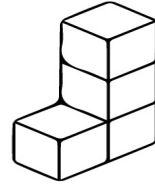
_____ cubic units.

5.)



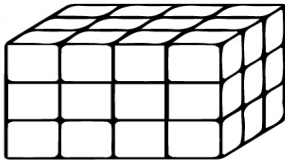
_____ cubic units.

6.)



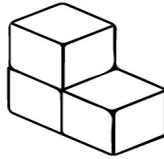
_____ cubic units.

7.)



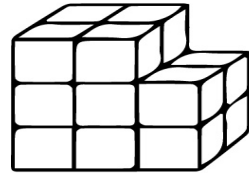
_____ cubic units.

8.)



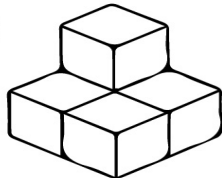
_____ cubic units.

9.)



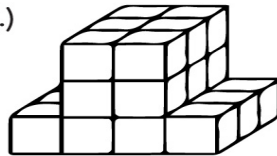
_____ cubic units.

10.)



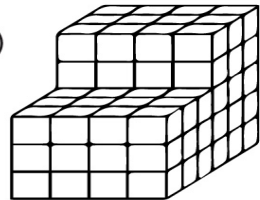
_____ cubic units.

11.)



_____ cubic units.

12.)



_____ cubic units.