

## Reading Analog Clocks (A)


Read each time and write it in the space under the clock.

1.



\_\_\_\_\_

2.



\_\_\_\_\_

3.




\_\_\_\_\_

4.



\_\_\_\_\_

5.




\_\_\_\_\_

6.



\_\_\_\_\_

7.




\_\_\_\_\_

8.




\_\_\_\_\_

9.




\_\_\_\_\_

10.




\_\_\_\_\_

11.



\_\_\_\_\_

12.



\_\_\_\_\_