



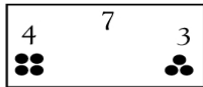
Fact families

Finish the fact family for this group of numbers.

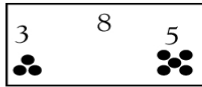


| | |
|-----------|---|
| $5 + 4 =$ | 9 |
| $4 + 5 =$ | 9 |
| $9 - 4 =$ | 5 |
| $9 - 5 =$ | 4 |

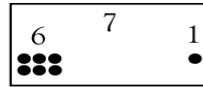
Finish the fact family for each group of numbers.



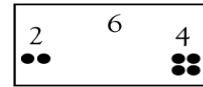
| | |
|-----------|----------------------|
| $4 + 3 =$ | <input type="text"/> |
| $3 + 4 =$ | <input type="text"/> |
| $7 - 3 =$ | <input type="text"/> |
| $7 - 4 =$ | <input type="text"/> |




| | |
|-----------|----------------------|
| $3 + 5 =$ | <input type="text"/> |
| $5 + 3 =$ | <input type="text"/> |
| $8 - 5 =$ | <input type="text"/> |
| $8 - 3 =$ | <input type="text"/> |



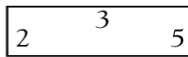
| | |
|-----------|----------------------|
| $6 + 1 =$ | <input type="text"/> |
| $1 + 6 =$ | <input type="text"/> |
| $7 - 1 =$ | <input type="text"/> |
| $7 - 6 =$ | <input type="text"/> |



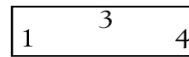
| | |
|-----------|----------------------|
| $2 + 4 =$ | <input type="text"/> |
| $4 + 2 =$ | <input type="text"/> |
| $6 - 4 =$ | <input type="text"/> |
| $6 - 2 =$ | <input type="text"/> |



| | |
|-----------|----------------------|
| $2 + 7 =$ | <input type="text"/> |
| $7 + 2 =$ | <input type="text"/> |
| $9 - 2 =$ | <input type="text"/> |
| $9 - 7 =$ | <input type="text"/> |




| | |
|-----------|----------------------|
| $3 + 2 =$ | <input type="text"/> |
| $2 + 3 =$ | <input type="text"/> |
| $5 - 2 =$ | <input type="text"/> |
| $5 - 3 =$ | <input type="text"/> |




| | |
|-----------|----------------------|
| $3 + 1 =$ | <input type="text"/> |
| $1 + 3 =$ | <input type="text"/> |
| $4 - 1 =$ | <input type="text"/> |
| $4 - 3 =$ | <input type="text"/> |




| | |
|------------|----------------------|
| $2 + 8 =$ | <input type="text"/> |
| $8 + 2 =$ | <input type="text"/> |
| $10 - 2 =$ | <input type="text"/> |
| $10 - 8 =$ | <input type="text"/> |



| | |
|------------|----------------------|
| $5 + 5 =$ | <input type="text"/> |
| $10 - 5 =$ | <input type="text"/> |



| | |
|-----------|----------------------|
| $4 + 4 =$ | <input type="text"/> |
| $8 - 4 =$ | <input type="text"/> |

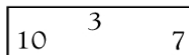


| | |
|-----------|----------------------|
| $3 + 3 =$ | <input type="text"/> |
| $6 - 3 =$ | <input type="text"/> |

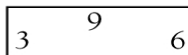


| | |
|-----------|----------------------|
| $2 + 2 =$ | <input type="text"/> |
| $4 - 2 =$ | <input type="text"/> |

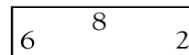
Finish the fact family for each group of numbers.



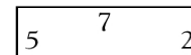
| |
|----------------------|
| <input type="text"/> |
| <input type="text"/> |
| <input type="text"/> |
| <input type="text"/> |



| |
|----------------------|
| <input type="text"/> |
| <input type="text"/> |
| <input type="text"/> |
| <input type="text"/> |



| |
|----------------------|
| <input type="text"/> |
| <input type="text"/> |
| <input type="text"/> |
| <input type="text"/> |



| |
|----------------------|
| <input type="text"/> |
| <input type="text"/> |
| <input type="text"/> |
| <input type="text"/> |