



Two-Step Transformations (B)

Directions: Transform each triangle below using the instructions in the order given. Draw and label each transformation.


Triangle A
Triangle B



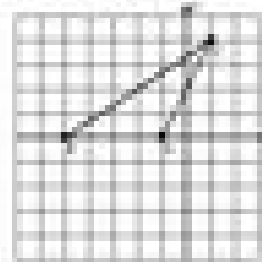
Triangle C
Triangle D




Triangle E
Triangle F



Triangle G
Triangle H



Triangle I
Triangle J



Triangle K
Triangle L

