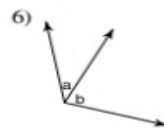
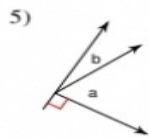
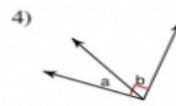
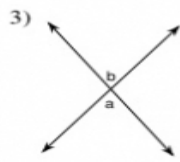
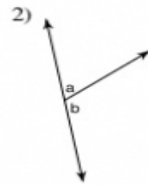
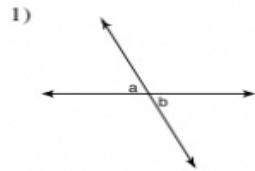


Angle Relationships

Name the relationship: complementary, supplementary, vertical, or adjacent.



Name the relationship: alternate interior, corresponding, or alternate exterior.

