



What time is it?

Exercise 1: Write the time shown below each clock.




1. Quarter past 3




2.




3.



4.



5.



6.

Exercise 2: Write the digital times for each.

1. Quarter past 8. _____ 8:15
2. Five past 9. _____
3. Ten to 4. _____
4. Twenty five to 7. _____
5. Twenty past 3. _____
6. Half past 5. _____
7. Quarter to 8. _____
8. Twenty to 12. _____
9. Ten past 10. _____
10. Five to 10. _____