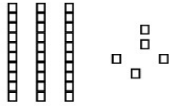


Name _____

CCSS 2.NBT.1 Understand place value


Place Value

Directions: Write how many tens and ones. Then write the number.




___ tens ___ ones

___ + ___ = ___



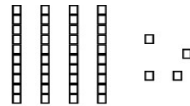
___ tens ___ ones

___ + ___ = ___




___ tens ___ ones

___ + ___ = ___



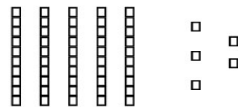
___ tens ___ ones

___ + ___ = ___



___ tens ___ ones

___ + ___ = ___



___ tens ___ ones

___ + ___ = ___