
















Name : \_\_\_\_\_ Score : \_\_\_\_\_

Teacher : \_\_\_\_\_ Date : \_\_\_\_\_

---

### Measuring Line Segments

How many Inches ?

- |     |  |       |
|-----|--|-------|
| 1)  |     | _____ |
| 2)  |     | _____ |
| 3)  |     | _____ |
| 4)  |     | _____ |
| 5)  |     | _____ |
| 6)  |     | _____ |
| 7)  |     | _____ |
| 8)  |    | _____ |
| 9)  |   | _____ |
| 10) |  | _____ |
| 11) |   | _____ |
| 12) |   | _____ |
| 13) |  | _____ |
| 14) |  | _____ |
| 15) |   | _____ |