



Graphing Linear Inequalities

Sketch the graph of each linear inequality.


21. $y < -3x + 4$




22. $y < \frac{3}{2}x - 2$




23. $y > x - 2$



24. $y > 4x$



25. $y > 2x + 3$



26. $y < \frac{3}{4}x + 2$

