







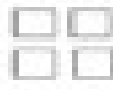













Name: _____

Hot Cocoa Addition

Directions: Add to find how many marshmallows are in each cup.

 _____ +  _____ = _____	 _____ +  _____ = _____		 _____ +  _____ = _____	
 _____ +  _____ = _____	 _____ +  _____ = _____		 _____ +  _____ = _____	
 _____ +  _____ = _____	 _____ +  _____ = _____	