




Kindergarten Math Worksheet

Name _____

Kindergarten review.

1. Which figure has equal parts?



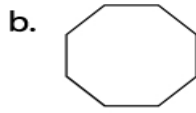
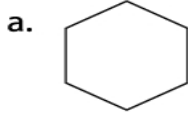
Answer: _____

2. Write the missing number in this sequence:

4, 5, 6, ____, 8, ____, 10

Answer: _____, _____

3. Which shape has more corners ?



Answer: _____

4. Add.

$$3 + 9 =$$

Answer: _____

5. Subtract.

$$7 - 4 =$$

Answer: _____