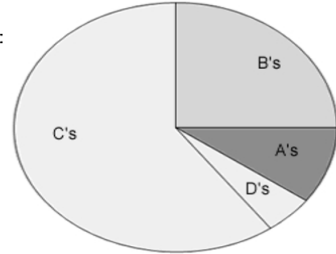


Interpreting Graphs

1. Mr. M's class grades were graphed as a pie graph. Based on this graph:

- a) The largest percentage of students received what grade? C
- b) The smallest percentage of students received what grade? D
- c) Estimate what percentage of the class received a B. 25%
- d) Based on the graph, do you think Mr. M's class is hard?
Why or why not? answers vary





2. The scatter plot shows a bus stop where those waiting at the bus are plotted by their height and by their age. Identify which dot goes with which passenger.

- 1) Dennis
- 2) Alice
- 3) Freda
- 4) Brenda
- 5) Errol
- 6) Cathy
- 7) Gavin

1. The Bus Stop Queue

Who is represented by each point on the scattergraph, below?



3. The bar graph compares the number of students enrolled in classes.

- a) What class has the highest enrollment?
Econ
- b) How many students are enrolled in Chemistry (chem.)? ~155
- c) How many are enrolled in Psychology (Psych)? ~275

