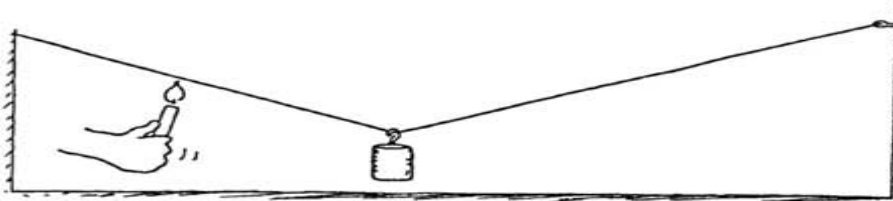


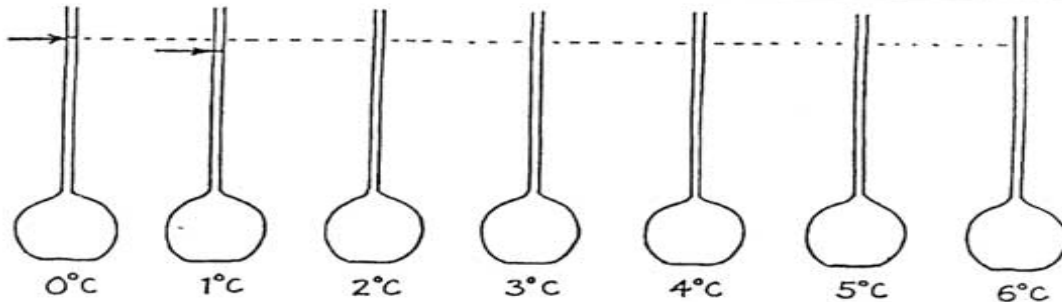
**CONCEPTUAL Physics** PRACTICE PAGE

*Thermal Expansion*

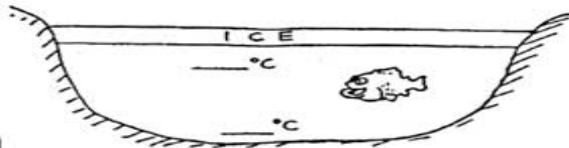
1. The weight hangs above the floor from the copper wire. When a candle is moved along the wire and heats it, what happens to the height of the weight above the floor? Why?



2. The levels of water at 0°C and 1°C are shown below in the first two flasks. At these temperatures there is microscopic slush in the water. There is slightly more slush at 0°C than at 1°C. As the water is heated, some of the slush collapses as it melts, and the level of the water falls in the tube. That's why the level of water is slightly lower in the 1°C-tube. Make rough estimates and sketch in the appropriate levels of water at the other temperatures shown. What is important about the level when the water reaches 4°C?



3. The diagram at right shows an ice-covered pond. Mark the probable temperatures of water at the top and bottom of the pond.



I CAN'T GET THIS METAL LID OFF THE JAR... SHOULD I HEAT THE LID OR COOL IT? WHY?

WHICH WILL WEIGH MORE, 1 LITER OF ICE OR 1 LITER OF WATER?



Draw it!