

ANSWERS AND EXPLANATIONS FOR THE 100 QUESTIONS

1. There are two ways of adding the time on a clock:


- a. What time is it?
- b. What other hour?

2. There are examples of different ways to add the time:

a) Adding the "hour hand"



- a. What time is it?
- b. It is 3 o'clock.



- a. What time is it?
- b. It is 6 o'clock.



- a. What time is it?
- b. It is 9 o'clock.


b) Adding "half past"



- a. What time is it?
- b. It is half past 3.



- a. What time is it?
- b. It is half past 6.



- a. What time is it?
- b. It is half past 9.


c) Adding "quarter past"



- a. What time is it?
- b. It is quarter past 3.



- a. What time is it?
- b. It is quarter past 6.



- a. What time is it?
- b. It is quarter past 9.