


Name _____


Date _____

Multiplication Arrays


Directions: Use the array to find the product.




$3 \times 4 =$ _____




$5 \times 5 =$ _____




$2 \times 9 =$ _____



$4 \times 10 =$ _____



$6 \times 3 =$ _____



$6 \times 4 =$ _____