

Finding the Area of Polygons

Squares:

1. $A =$ _____



2. $A =$ _____




Rectangles:

3. $A =$ _____



4. $A =$ _____



Parallelograms:

5. $A =$ _____



6. $A =$ _____



Rhombuses:

7. $A =$ _____




8. $A =$ _____




Triangles:

9. $A =$ _____



10. $A =$ _____



Trapezoids:

11. $A =$ _____



12. $A =$ _____

