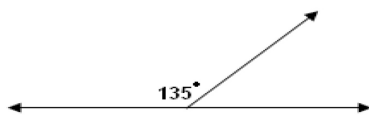


Student Name: \_\_\_\_\_

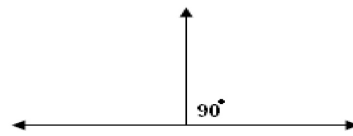
Score: \_\_\_\_\_

### Supplementary Angles

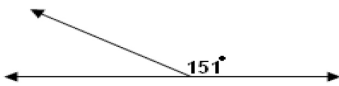
Find the missing angles in the following supplementary angles:



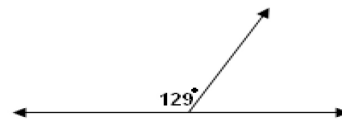
Answer: \_\_\_\_\_



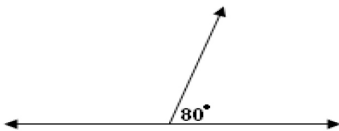
Answer: \_\_\_\_\_



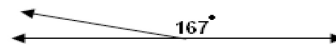
Answer: \_\_\_\_\_



Answer: \_\_\_\_\_



Answer: \_\_\_\_\_



Answer: \_\_\_\_\_