

Print Worksheet

Name: _____

Date: _____

Convert each container's capacity milliliters.



0.75L

_____ mL



1 quart

_____ mL

0.25L



_____ mL



5 pints

_____ mL

Convert each container's capacity to liters.

1 pint



_____ L



_____ L

250mL



_____ L

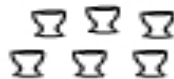
5 quarts



_____ L

Total Volume

Calculate the total volume these of containers.



25mL each



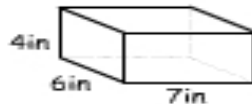
5100mL

3
gallons

total volume =

_____ mL

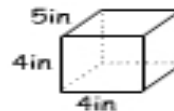
Calculating Volume



4in

6in

7in

volume =
_____ in³

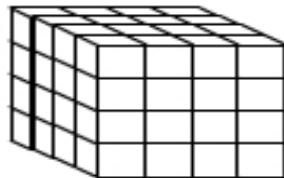
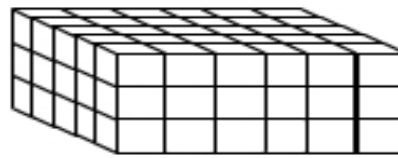
5in

4in

4in

volume =
_____ in³

Volume of 3D Stacks

 = 1 cm³volume =
_____ cm³volume =
_____ cm³