

Name : \_\_\_\_\_


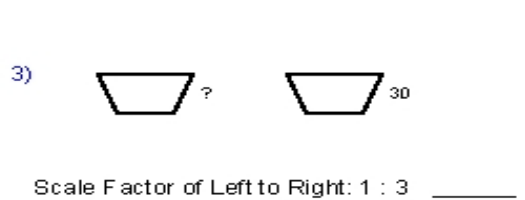
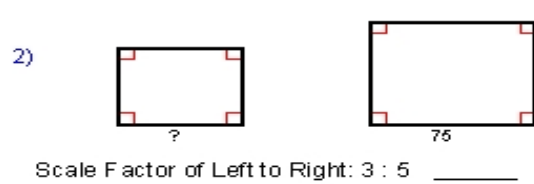
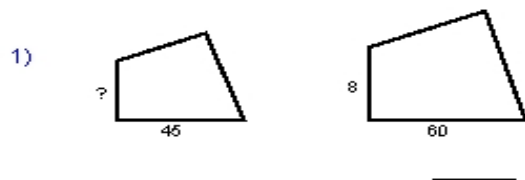
Score : \_\_\_\_\_

Teacher : \_\_\_\_\_

Date : \_\_\_\_\_

### Using Similar Polygons

Each polygon pair is similar. Find the missing side length.



Given each polygon pair is similar, find x.

