

Name _____

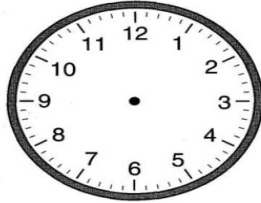
CCSS 2.MD.7 Tell and write time from analog and digital clocks to the nearest...

Telling Time

→ Directions: Draw in the minute and hour hands to match the digital time.




8:15



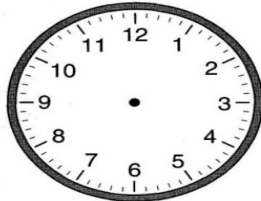
6:45



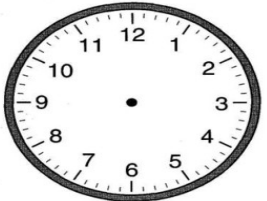
1:45



5:15



12:45



4:15



9:45



10:15



2:15

