

Name: _____

CCSS 2.MD.7 Tell and write time from analog and digital clocks to the nearest....

Telling Time to Five Minutes

Directions: Draw in the minute and hour hands to match the digital time.



4:00



4:05



4:10




4:15



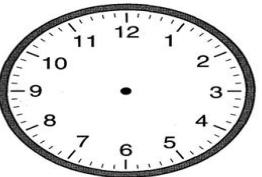
4:20



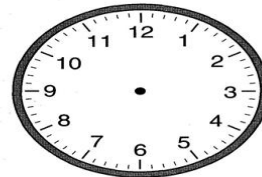
4:25




4:30



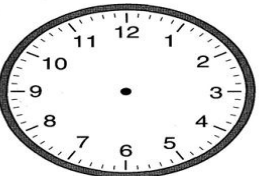
4:35




4:40



4:45



4:50



4:55