

TELLING TIME TO THE NEAREST 5 MINUTES

NAME: _____

DATE: _____

DIRECTIONS: WRITE THE TIME IN DIGITAL FORM UNDERNEATH EACH CLOCK


1.



2.




3.



4.




5.




6.




7.



8.



9.




10.




11.




12.



13.



14.




15.



16.



17.



18.

