



Name: _____

Draw and write the time that is **HALF PAST** the time given.


3:00




11:00



5:00




9:00




Draw and write the time that is **QUARTER AFTER** the time given.


8:00




1:00



10:00




4:00




Draw and write the time that is **QUARTER TILL** the time given.


6:00




12:00



3:00



7:00



Write the time.

Half past 4 _____

Quarter till 2 _____

Quarter after 1 _____

Quarter till 8 _____

Half past 12 _____

Quarter after 3 _____

Half past 3 _____

Quarter till 9 _____