

Name \_\_\_\_\_

**ASSESSMENT 3**

Date \_\_\_\_\_

**LESSON 20**

**Math 2**

1. John has 8 pennies. Susan gave him 2 pennies. How many pennies does John have now?

What type of story is this?

Circle one:            some, some more    some, some went away

Four children were playing. One child went home. How many children are playing now?

What type of story is this?

Circle one:            some, some more    some, some went away

2. Finish the repeating pattern.



3. Write these numbers using digits.

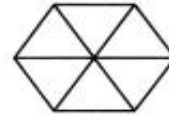
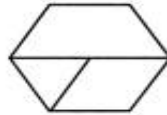
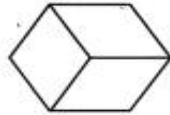
fourteen \_\_\_\_\_

thirty-five \_\_\_\_\_

sixty-one \_\_\_\_\_

seventy \_\_\_\_\_

4. Circle the shapes that have equal size pieces.



5. What is one more than 49? \_\_\_\_\_

What is one less than 20? \_\_\_\_\_

6. Add.

$6 + 1 =$  \_\_\_\_\_     $5 + 0 =$  \_\_\_\_\_     $8 + 8 =$  \_\_\_\_\_     $0 + 7 =$  \_\_\_\_\_

$7 + 7 =$  \_\_\_\_\_     $1 + 8 =$  \_\_\_\_\_     $3 + 3 =$  \_\_\_\_\_     $9 + 9 =$  \_\_\_\_\_