

Perimeter and Area of Triangles (A)

Calculate the perimeter and area for each triangle.

1.



$$P = 7 \text{ cm}$$

$$A = 7 \text{ cm}^2$$


2.



$$P = 7 \text{ AU}$$

$$A = 7 \text{ AU}^2$$


3.



$$P = 7 \text{ ft}$$

$$A = 7 \text{ ft}^2$$


4.



$$P = 7 \text{ m}$$

$$A = 7 \text{ m}^2$$

5.



$$P = 7 \text{ m}$$

$$A = 7 \text{ m}^2$$

6.



$$P = 7 \text{ AU}$$

$$A = 7 \text{ AU}^2$$