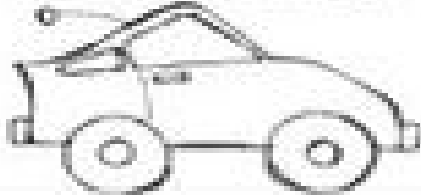



Name _____


Use the equation to complete the double ten frame. Write the answer.




RACE DAY



$10 + 2 = \underline{\quad}$



$10 + 3 = \underline{\quad}$




$10 + 9 = \underline{\quad}$




$10 + 4 = \underline{\quad}$




$10 + 7 = \underline{\quad}$




$10 + 6 = \underline{\quad}$



$10 + 1 = \underline{\quad}$



$10 + 8 = \underline{\quad}$



$10 + 5 = \underline{\quad}$