


Name: _____


shade in the number, then count how many more boxes are needed to make a 10.




$2 + _ = 10$




$5 + _ = 10$




$6 + _ = 10$




$9 + _ = 10$




$3 + _ = 10$



$8 + _ = 10$



$4 + _ = 10$



$7 + _ = 10$