













Easter Egg Map (A)

What is the grid reference of each Easter egg?

| | A | B | C | D | E | F | G | H | I |
|---|---|---|---|---|---|---|--|--|---|
| 1 | | | | | | | | | |
| 2 | | | |  | | | | | |
| 3 |  | | | | | | | | |
| 4 | | | | | | |  | | |
| 5 | |  | | | | | |  | |
| 6 | | | | | | | | | |
| 7 | | | | | | |  |  | |
| 8 | | | | | | | | |  |
| 9 |  | | | | |  |  | | |

How many Easter eggs are there?

How many  Easter eggs are there?

How many blanks are there?

Happy Easter from Math-Drills.Com!