

# SYMMETRY

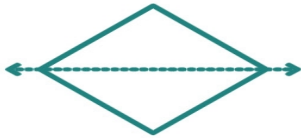
Is the dotted line on each shape a line of symmetry?  
Write yes or no.

Name: \_\_\_\_\_

Date: \_\_\_\_\_



\_\_\_\_\_



\_\_\_\_\_



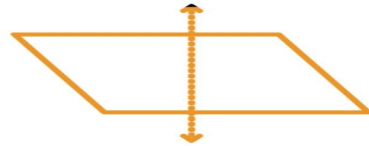
\_\_\_\_\_



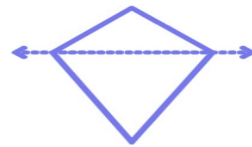
\_\_\_\_\_



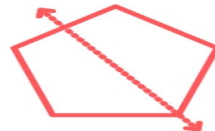
\_\_\_\_\_



\_\_\_\_\_



\_\_\_\_\_



\_\_\_\_\_