

Name \_\_\_\_\_

..... **Zero in on the Order** .....



Write the sums.

$$\begin{array}{r} 1. \ 0 \\ + 8 \\ \hline \end{array}$$

$$\begin{array}{r} 2. \ 8 \\ + 0 \\ \hline \end{array}$$

$$\begin{array}{r} 3. \ 4 \\ + 6 \\ \hline \end{array}$$

$$\begin{array}{r} 4. \ 6 \\ + 4 \\ \hline \end{array}$$

$$\begin{array}{r} 5. \ 9 \\ + 1 \\ \hline \end{array}$$

$$\begin{array}{r} 6. \ 1 \\ + 9 \\ \hline \end{array}$$

$$\begin{array}{r} 7. \ 5 \\ + 3 \\ \hline \end{array}$$

$$\begin{array}{r} 8. \ 3 \\ + 5 \\ \hline \end{array}$$

$$\begin{array}{r} 9. \ 7 \\ + 3 \\ \hline \end{array}$$

$$\begin{array}{r} 10. \ 0 \\ + 5 \\ \hline \end{array}$$

$$\begin{array}{r} 11. \ 2 \\ + 6 \\ \hline \end{array}$$

$$\begin{array}{r} 12. \ 8 \\ + 2 \\ \hline \end{array}$$

$$\begin{array}{r} 13. \ 6 \\ + 0 \\ \hline \end{array}$$

$$\begin{array}{r} 14. \ 4 \\ + 3 \\ \hline \end{array}$$

$$\begin{array}{r} 15. \ 3 \\ + 6 \\ \hline \end{array}$$


$$\begin{array}{r} 16. \ 0 \\ + 4 \\ \hline \end{array}$$

$$\begin{array}{r} 17. \ 5 \\ + 4 \\ \hline \end{array}$$

$$\begin{array}{r} 18. \ 9 \\ + 0 \\ \hline \end{array}$$

$$\begin{array}{r} 19. \ 3 \\ + 4 \\ \hline \end{array}$$

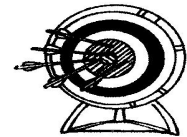
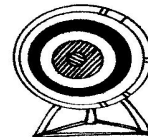
$$\begin{array}{r} 20. \ 5 \\ + 2 \\ \hline \end{array}$$



**Real World Connection**

Tell a story. Write two addition sentences.

21. \_\_\_\_\_ + \_\_\_\_\_ = \_\_\_\_\_  
\_\_\_\_\_ + \_\_\_\_\_ = \_\_\_\_\_



arrows