


Math = Fractions

Name _____

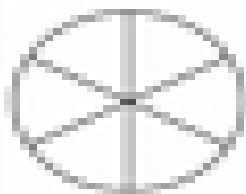
Fractions: Fifth, Sixth, Seventh

Directions: Follow the directions below.


1. Color $\frac{1}{5}$ of the circle.



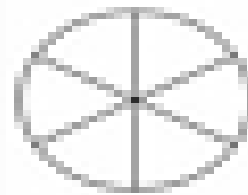
2. Color $\frac{2}{5}$ of the circle.



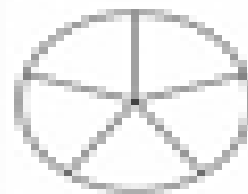
3. Color $\frac{3}{5}$ of the circle.



4. Color $\frac{1}{6}$ of the circle.



5. Color $\frac{2}{6}$ of the circle.



6. Color $\frac{3}{6}$ of the circle.

