

Name: \_\_\_\_\_

## Elements, Compounds, and Mixtures

**Directions:** Classify each of the pictures below by placing the correct label in the blanks below:

A= Element

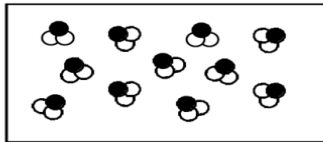
B= Compound

C= Mixture of elements

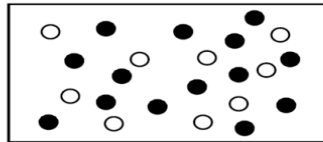
D= Mixture of compounds

E= Mixture of elements and compounds

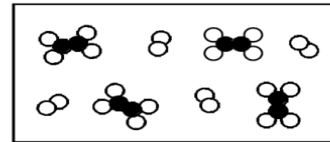
Each circle represents an atom and each different color represents a different kind of atom. If two atoms are touching then they are bonded together.



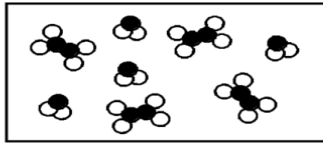
1) \_\_\_\_\_



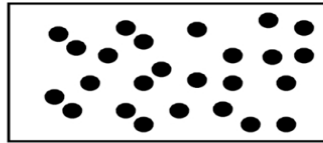
2) \_\_\_\_\_



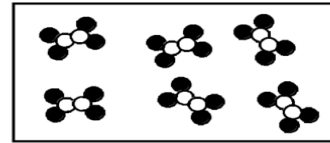
3) \_\_\_\_\_



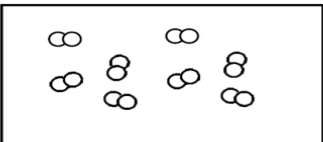
4) \_\_\_\_\_



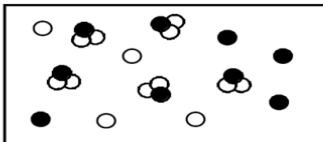
5) \_\_\_\_\_



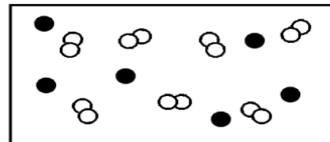
6) \_\_\_\_\_



7) \_\_\_\_\_



8) \_\_\_\_\_



9) \_\_\_\_\_