



















Easter Egg Map (H)

What is the grid reference of each Easter egg?

	A	B	C	D	E	F	G	H	I
1									
2									
3									
4									
5									
6									
7									
8									
9									

How many Easter eggs are there? _____

How many  Easter eggs are there? _____

How many blanks are there? _____

Happy Easter from Math-Drills.Com!