

5. The drawing below has been made from a photograph showing a cell undergoing mitosis. Based on the drawing, in what stage of mitosis must the cell have been in?

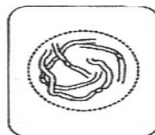


\_\_\_\_\_

6. The drawings A-E show stages of mitosis in an plant cell.



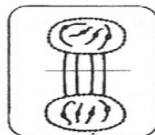
A



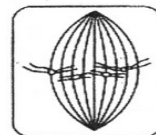
B



C



D



E

- (a) Which of the drawings A-E shows

