

Elementary Math Worksheet

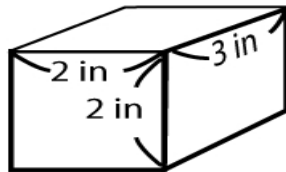
8th Grade Math Worksheet

Volume

NAME _____

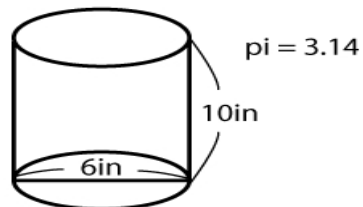
Find the volume of each shape below.

1.



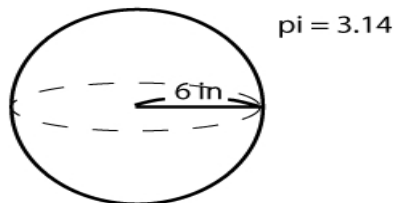
Answer: _____

2.



Answer: _____

3.



Answer: _____

