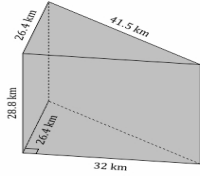


Name _____

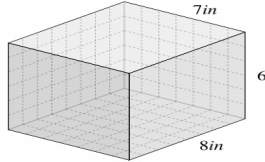
Date _____

VOLUME OF PRISM

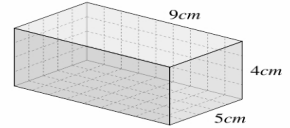
Calculate the volume of each prism below!



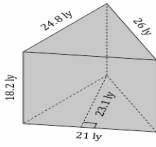
V: _____



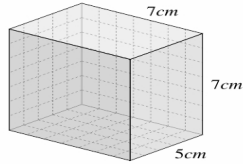
V: _____



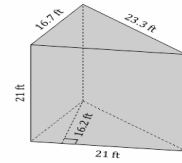
V: _____



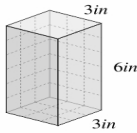
V: _____



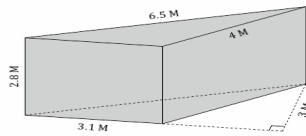
V: _____



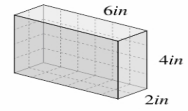
V: _____



V: _____



V: _____



V: _____