
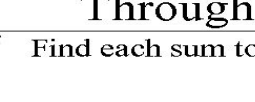
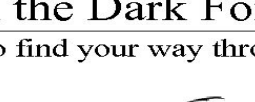
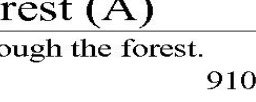


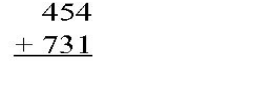







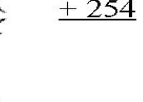






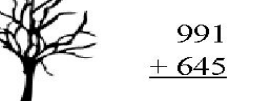




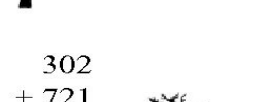

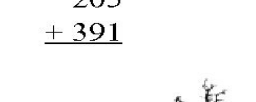







Through the Dark Forest (A)

Find each sum to find your way through the forest.

	$\begin{array}{r} 454 \\ + 731 \\ \hline \end{array}$		$\begin{array}{r} 944 \\ + 100 \\ \hline \end{array}$		$\begin{array}{r} 106 \\ + 568 \\ \hline \end{array}$		$\begin{array}{r} 910 \\ + 713 \\ \hline \end{array}$	
	$\begin{array}{r} 953 \\ + 638 \\ \hline \end{array}$		$\begin{array}{r} 729 \\ + 788 \\ \hline \end{array}$		$\begin{array}{r} 442 \\ + 835 \\ \hline \end{array}$		$\begin{array}{r} 458 \\ + 254 \\ \hline \end{array}$	
	$\begin{array}{r} 302 \\ + 721 \\ \hline \end{array}$		$\begin{array}{r} 150 \\ + 131 \\ \hline \end{array}$		$\begin{array}{r} 205 \\ + 391 \\ \hline \end{array}$		$\begin{array}{r} 590 \\ + 910 \\ \hline \end{array}$	
	$\begin{array}{r} 512 \\ + 146 \\ \hline \end{array}$		$\begin{array}{r} 334 \\ + 135 \\ \hline \end{array}$		$\begin{array}{r} 175 \\ + 839 \\ \hline \end{array}$		$\begin{array}{r} 554 \\ + 481 \\ \hline \end{array}$	
	$\begin{array}{r} 443 \\ + 761 \\ \hline \end{array}$		$\begin{array}{r} 546 \\ + 881 \\ \hline \end{array}$		$\begin{array}{r} 119 \\ + 185 \\ \hline \end{array}$		$\begin{array}{r} 189 \\ + 520 \\ \hline \end{array}$	
$\begin{array}{r} 324 \\ + 696 \\ \hline \end{array}$		$\begin{array}{r} 472 \\ + 157 \\ \hline \end{array}$		$\begin{array}{r} 745 \\ + 760 \\ \hline \end{array}$		$\begin{array}{r} 426 \\ + 339 \\ \hline \end{array}$		
	$\begin{array}{r} 472 \\ + 157 \\ \hline \end{array}$		$\begin{array}{r} 426 \\ + 339 \\ \hline \end{array}$		$\begin{array}{r} 426 \\ + 339 \\ \hline \end{array}$		$\begin{array}{r} 426 \\ + 339 \\ \hline \end{array}$	