

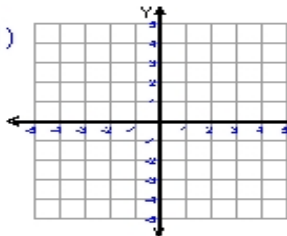
Name : \_\_\_\_\_

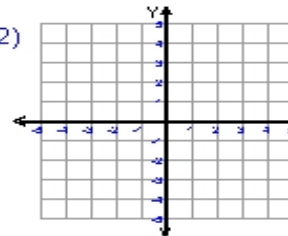
Score : \_\_\_\_\_

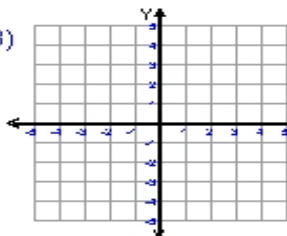
Teacher : \_\_\_\_\_

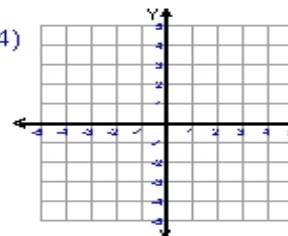
Date : \_\_\_\_\_

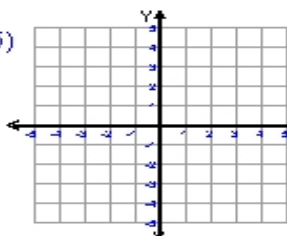
**Sketch and Write the Equation For Each Line**

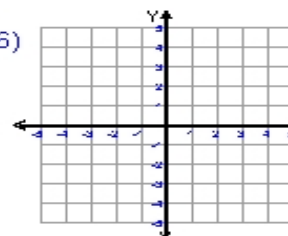
1)  equation \_\_\_\_\_  
ordered pair =  $(2, 4)$   
ordered pair =  $(1, 0)$   
slope (m) = \_\_\_\_\_  
y-intercept =  $-4$

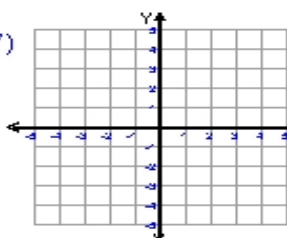
2)  equation \_\_\_\_\_  
ordered pair =  $(-4, -1)$   
ordered pair =  $(2, 4)$   
slope (m) = \_\_\_\_\_  
y-intercept =  $3$

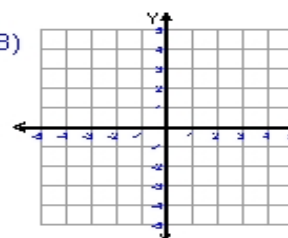
3)  equation \_\_\_\_\_  
ordered pair =  $(3, 3)$   
ordered pair =  $(-3, -1)$   
slope (m) = \_\_\_\_\_  
y-intercept =  $1$

4)  equation \_\_\_\_\_  
ordered pair =  $(3, -3)$   
ordered pair =  $(-3, 5)$   
slope (m) = \_\_\_\_\_  
y-intercept =  $1$

5)  equation \_\_\_\_\_  
ordered pair =  $(5, -4)$   
ordered pair =  $(-5, 0)$   
slope (m) = \_\_\_\_\_  
y-intercept =  $-2$

6)  equation \_\_\_\_\_  
ordered pair =  $(2, -4)$   
ordered pair =  $(1, 0)$   
slope (m) = \_\_\_\_\_  
y-intercept =  $4$

7)  equation \_\_\_\_\_  
ordered pair =  $(3, 0)$   
ordered pair =  $(-1, 4)$   
slope (m) = \_\_\_\_\_  
y-intercept =  $3$

8)  equation \_\_\_\_\_  
ordered pair =  $(-3, 3)$   
ordered pair =  $(3, -5)$   
slope (m) = \_\_\_\_\_  
y-intercept =  $-1$

