

Types of Triangles Quiz


1. List two ways to classify triangles:

- a) by comparing the length of each side
 b) by measuring the angles.

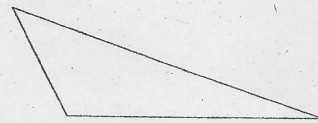
2. Classify each triangle in two different ways using the following terms:

scalene
isoscelesequilateral
rightacute
obtuse


- a)
- right
- scalene



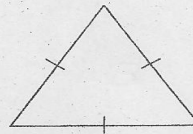
- b)
- obtuse
- scalene



- c)
- acute
- isosceles



- d)
- acute
- equilateral



- e)
- obtuse
- isosceles



- f)
- right
- isosceles

