

NAME: \_\_\_\_\_

DATE: \_\_\_\_\_

# CLOCK TIME! By the hour!

Directions: Write down the time that is on each clock.




\_\_\_\_\_




\_\_\_\_\_



\_\_\_\_\_




\_\_\_\_\_



\_\_\_\_\_




\_\_\_\_\_



\_\_\_\_\_



\_\_\_\_\_



\_\_\_\_\_

