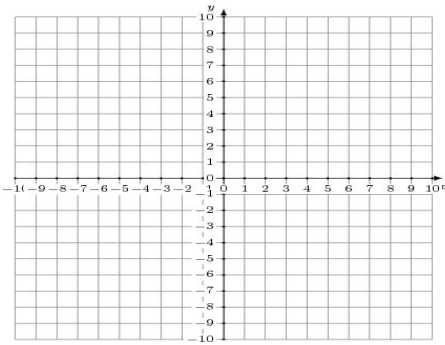


Graphing Linear Systems (E)

Graph each system and identify its solution.

1.

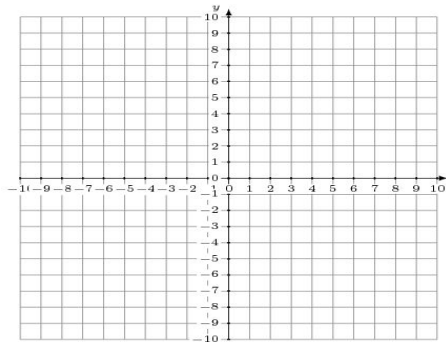
$$\begin{aligned}x + y &= -6 \\ 3x - 5y &= -10\end{aligned}$$



Solution: (____,____)

2.

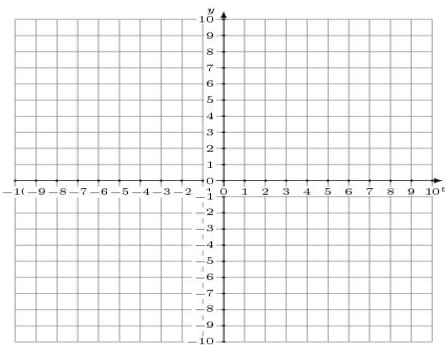
$$\begin{aligned}2x - 7y &= -7 \\ x - y &= -6\end{aligned}$$



Solution: (____,____)

3.

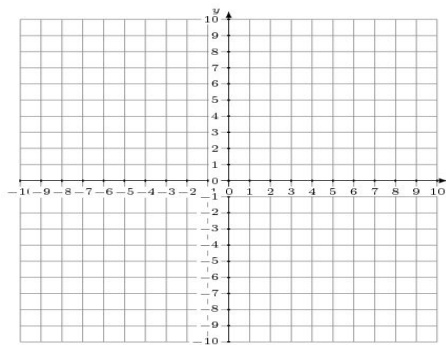
$$\begin{aligned}3x + 2y &= 14 \\ x - y &= 3\end{aligned}$$



Solution: (____,____)

4.

$$\begin{aligned}x + 4y &= -28 \\ 9x + 4y &= 36\end{aligned}$$



Solution: (____,____)