




Name: _____

Stuffed Animals - Pictograph

Stuffed Animals Owned By Students

Name	Number of Stuffed Animals
Sara	
Billy	
Jess	

 = 2 stuffed animals

1. How many stuffed animals does Sara have? _____
2. How many stuffed animals does Jess have? _____
3. How many stuffed animals does Billy have? _____
4. Who has the most stuffed animals? _____
5. Who has the fewest stuffed animals? _____
6. Does Jess or Sara have more stuffed animals? _____
7. Who has six stuffed animals? _____