


Name _____ Date _____

Multiplication Grids/Arrays: Find the Product.

Common Core Math: 3.OA.1



$2 \times 3 = \underline{\quad}$




$3 \times 5 = \underline{\quad}$



$2 \times 5 = \underline{\quad}$



$3 \times 6 = \underline{\quad}$




$4 \times 6 = \underline{\quad}$




$2 \times 5 = \underline{\quad}$

© abcteach.com




$4 \times 4 = \underline{\quad}$



$4 \times 5 = \underline{\quad}$



$2 \times 3 = \underline{\quad}$



$4 \times 4 = \underline{\quad}$